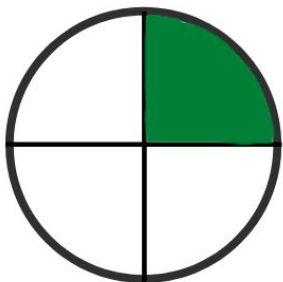


Name:

Date:

MATCHING FRACTIONS TO A PICTURE

What fraction of the shape is colored? Circle the correct answer.

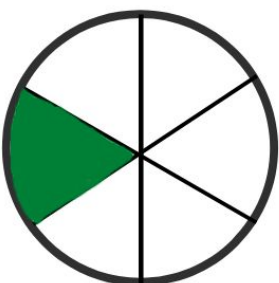


$\frac{1}{4}$

$\frac{1}{2}$

$\frac{1}{6}$

$\frac{2}{3}$




$\frac{1}{8}$

$\frac{1}{2}$

$\frac{1}{6}$

$\frac{1}{3}$

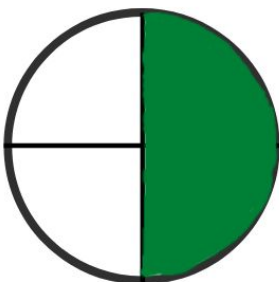


$\frac{1}{4}$

$\frac{1}{2}$

$\frac{5}{6}$

$\frac{1}{3}$

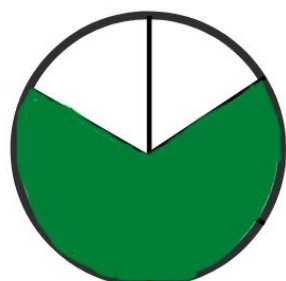


$\frac{1}{4}$

$\frac{1}{2}$

$\frac{1}{6}$

$\frac{3}{4}$



$\frac{3}{4}$

$\frac{1}{2}$

$\frac{1}{6}$

$\frac{2}{3}$